

Escola: \_\_\_\_\_


Data: \_\_\_\_\_ Turma: \_\_\_\_\_


**SOESCOLA.COM**


Aluno: \_\_\_\_\_



VAMOS CONTAR QUANTOS ELEMENTOS TEM EM CADA CONJUNTO E PINTAR O QUADRINHO COM O NÚMERO CORRESPONDENTE.

	<table border="1"><tr><td>4</td><td>5</td></tr><tr><td>3</td><td>6</td></tr></table>	4	5	3	6
4	5				
3	6				

	<table border="1"><tr><td>4</td><td>5</td></tr><tr><td>3</td><td>6</td></tr></table>	4	5	3	6
4	5				
3	6				

	<table border="1"><tr><td>4</td><td>5</td></tr><tr><td>3</td><td>6</td></tr></table>	4	5	3	6
4	5				
3	6				