

2) Pinte uma casinha:



3) Quantos bolos ela tem?



1

4) Observe o desenho ao lado e responda:

Quantas casas?

Quantos passarinhos:

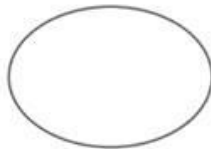
Quantas meninas?




5) Escreva no o numeral correspondente à quantidade de elementos que há em cada conjunto:



.....



.....

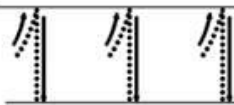
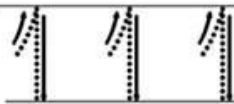
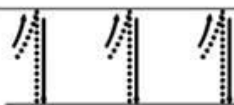


.....

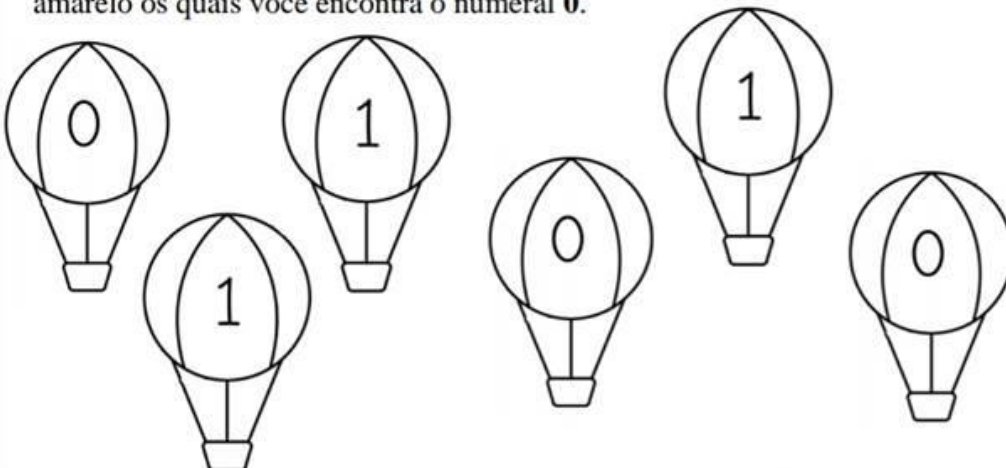
6) Vamos treinar o numeral 1.





7) Copie o numeral 1.



8) Pinte de vermelho os balões nos quais você encontra o numeral 1 e de amarelo os quais você encontra o numeral 0.



9) Pinte apenas 1 desenho de cada conjunto:



10) Pinte os espaços que contém o numeral 1 e veja o que aparece.

