

Escola: _____



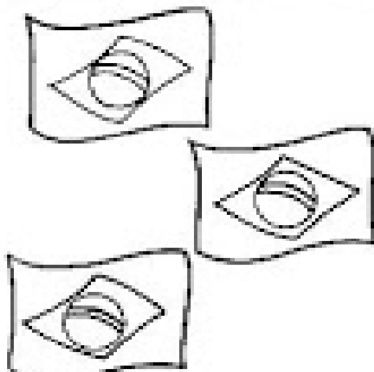
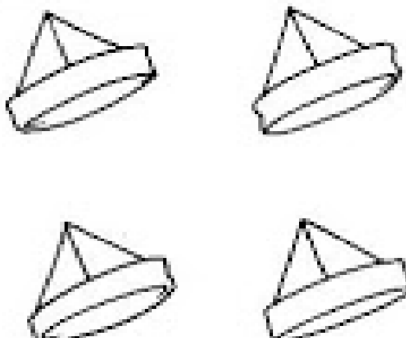
Data: _____ Turma: _____

SOESCOLA.COM

Aluno: _____

109

- Fazer um **X** no numeral que indica a quantidade de figuras encontradas em cada quadrado.
- Colorir os quadrinhos de acordo com o número marcado.

<table border="1"><tr><td>1</td><td>2</td><td>3</td><td>4</td><td>5</td><td>6</td></tr></table>  <table border="1"><tr><td> </td><td> </td><td> </td><td> </td><td> </td><td> </td></tr></table>	1	2	3	4	5	6							<table border="1"><tr><td>1</td><td>2</td><td>3</td><td>4</td><td>5</td><td>6</td></tr></table>  <table border="1"><tr><td> </td><td> </td><td> </td><td> </td><td> </td><td> </td></tr></table>	1	2	3	4	5	6						
1	2	3	4	5	6																				
1	2	3	4	5	6																				
<table border="1"><tr><td>1</td><td>2</td><td>3</td><td>4</td><td>5</td><td>6</td></tr></table>  <table border="1"><tr><td> </td><td> </td><td> </td><td> </td><td> </td><td> </td></tr></table>	1	2	3	4	5	6							<table border="1"><tr><td>1</td><td>2</td><td>3</td><td>4</td><td>5</td><td>6</td></tr></table>  <table border="1"><tr><td> </td><td> </td><td> </td><td> </td><td> </td><td> </td></tr></table>	1	2	3	4	5	6						
1	2	3	4	5	6																				
1	2	3	4	5	6																				

Escola: _____

Data: _____ Turma: _____

SOESCOLA.COM

Aluno: _____

110

- Escrever nos quadrinhos o numeral correspondente a cada conjunto.

