

Escola: _____

Data: _____ Turma: _____

SOESCOLA.COM

Aluno: _____

Pinte o resultado correto

19-10

19-9

13-8

9 6 8 7 11 10 12 9 8 7 5 6

13-5

18-9

15-7

8 7 5 4 10 12 1 9 8 7 6 5

15-8

17-10

16-8

7 8 6 9 12 7 5 8 8 7 5 6

Escola: _____

Data: _____ Turma: _____

SOESCOLA.COM

Aluno: _____

Complete para formar a quantidade indicada em cada caso.

$6 + 6$	12	$8 + 4$	10	$\square + \square$
$7 + 5$		$9 + 3$		$\square + \square$
$\square + \square$	16	$\square + \square$	14	$\square + \square$
$\square + \square$		$\square + \square$		$\square + \square$
$\square + \square$	22	$\square + \square$	15	$\square + \square$
$\square + \square$		$\square + \square$		$\square + \square$
$\square + \square$	18	$\square + \square$	17	$\square + \square$
$\square + \square$		$\square + \square$		$\square + \square$

Escola: _____

Data: _____ Turma: _____

SOESCOLA.COM

Aluno: _____

Pinte o resultado correto

$10+2$

$10+4$

$10+1$

23

21

12

17

14

41

16

18

111

101

11

110

$10+5$

$10+7$

$10+6$

51

15

16

6

7

21

71

17

17

16

19

18

$10+8$

$10+10$

$10+9$

18

81

19

24

21

20

110

101

19

901

91

18

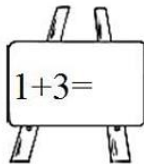
Escola: _____

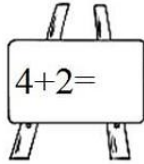
Data: _____ Turma: _____

SOESCOLA.COM

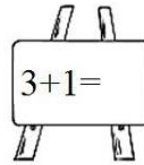
Aluno: _____

Continhas de adição

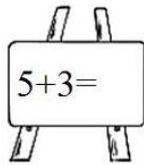
 $1+3=$

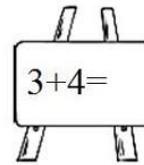
 $4+2=$

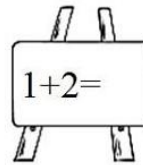


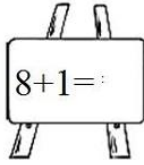
 $3+1=$

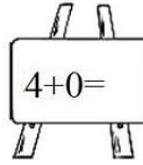
 $5+2=$

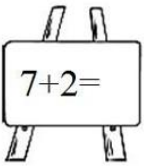
 $5+3=$

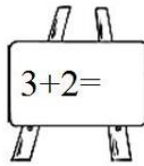
 $3+4=$

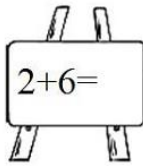
 $1+2=$

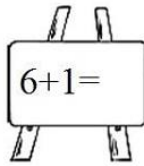
 $8+1=$

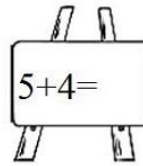
 $4+0=$

 $7+2=$

 $3+2=$

 $2+6=$

 $6+1=$

 $5+4=$