

Escola: _____

Data: _____

Turma: _____

SOESCOLA.COM

Aluno: _____

QUAL É O RESULTADO?

☞ Troque os símbolos e descubra os resultados.

			
1	2	3	4

$$\text{butterfly} \times 2 = \dots$$

$$\text{butterfly} \times 3 = \dots$$

$$\text{butterfly} \times 4 = \dots$$

$$\text{butterfly} \times 5 = \dots$$

$$\text{butterfly} \times 6 = \dots$$

$$\text{butterfly} \times 7 = \dots$$

$$\text{butterfly} \times 8 = \dots$$

$$\text{butterfly} \times 9 = \dots$$

$$\text{lion} \times 2 = \dots$$

$$\text{lion} \times 3 = \dots$$

$$\text{lion} \times 4 = \dots$$

$$\text{lion} \times 5 = \dots$$

$$\text{lion} \times 6 = \dots$$

$$\text{lion} \times 7 = \dots$$

$$\text{lion} \times 8 = \dots$$

$$\text{lion} \times 9 = \dots$$

$$\text{giraffe} \times 2 = \dots$$

$$\text{giraffe} \times 3 = \dots$$

$$\text{giraffe} \times 4 = \dots$$

$$\text{giraffe} \times 5 = \dots$$

$$\text{giraffe} \times 6 = \dots$$

$$\text{giraffe} \times 7 = \dots$$

$$\text{giraffe} \times 8 = \dots$$

$$\text{giraffe} \times 9 = \dots$$

$$\text{swan} \times 2 = \dots$$

$$\text{swan} \times 3 = \dots$$

$$\text{swan} \times 4 = \dots$$

$$\text{swan} \times 5 = \dots$$

$$\text{swan} \times 6 = \dots$$

$$\text{swan} \times 7 = \dots$$

$$\text{swan} \times 8 = \dots$$

$$\text{swan} \times 9 = \dots$$

Escola: _____





Data: _____ Turma: _____





SOESCOLA.COM









Aluno: _____









DECIFRANDO OS SÍMBOLOS









☞ Troque os símbolos por números e complete os fatos:









			
2	3	4	5

			
6	7	8	9

2 x 	_____	=	4
2 x 	_____	=	6
2 x 	_____	=	8
2 x 	_____	=	10
2 x 	_____	=	12
2 x 	_____	=	14
2 x 	_____	=	16
2 x 	_____	=	18

3 x 	_____	=	6
3 x 	_____	=	9
3 x 	_____	=	12
3 x 	_____	=	15
3 x 	_____	=	18
3 x 	_____	=	21
3 x 	_____	=	24
3 x 	_____	=	27

4 x 	_____	=	8
4 x 	_____	=	12
4 x 	_____	=	16
4 x 	_____	=	20
4 x 	_____	=	24
4 x 	_____	=	28
4 x 	_____	=	32
2 x 	_____	=	36

5 x 	_____	=	10
5 x 	_____	=	15
5 x 	_____	=	20
5 x 	_____	=	25
5 x 	_____	=	30
5 x 	_____	=	35
5 x 	_____	=	40
5 x 	_____	=	45

Escola: _____


Data: _____ Turma: _____

SOESCOLA.COM


Aluno: _____

CACA-FATOS

De acordo com os resultados abaixo, procure na caça os fatos fundamentais correspondentes.



1	X	1	8	X	6	1	X	7	X	5	X	4
4	X	6	X	8	2	X	7	X	7	X	9	X
X	0	X	3	X	6	X	0	8	X	3	X	0
7	X	5	X	0	8	X	8	X	0	9	X	8
X	1	9	X	4	X	6	5	X	9	X	1	X
9	X	9	X	7	X	8	2	X	3	X	0	5



_____ x _____ = 14	_____ x _____ = 24	_____ x _____ = 18
_____ x _____ = 63	_____ x _____ = 20	_____ x _____ = 64
_____ x _____ = 24	_____ x _____ = 81	_____ x _____ = 36
_____ x _____ = 45	_____ x _____ = 48	_____ x _____ = 6
_____ x _____ = 72	_____ x _____ = 35	_____ x _____ = 56

Escola: _____

Data: _____ Turma: _____

SOESCOLA.COM

Aluno: _____

LIGANDO OS NÚMEROS

Ligue as multiplicações aos seus produtos.

3×7

16

2×8

12

3×3

21

1×5

6

2×6

9

3×2

5

